

FRACTION

OPEN ENDED TASK CARDS

#3

Half of Frankie's are blue. Draw a p of her toys

#1

Draw 3 different and show how you would cut them into $\frac{1}{4}$.

FRACTIONS


#19

Cassie collects rocks. She put an eighth of her rocks in a red box. Draw her collection.

FRACTIONS

Name: _____

OPEN ENDED FRACTION TASK BOOKLET




Name: _____

OPEN ENDED FRACTION TASK TRACKER SHEET

Tick off the number as you complete it to keep a track of the tasks you

1	2	3	4	5
6	7	8	9	10
11	12	13	14	15
16	17	18	19	



OPEN ENDED TASK ANSWER SHEET

Write the number of the task card in the circle and then write/draw your answer in the box

OPEN ENDED FRACTION TASK ANSWER SHEET

Write the number of the task card in the circle and then write/draw your answer in the box

5

6





INCLUDES WORK BOOKLET

INCLUDED:

★ 20 Open Ended Fraction task cards – 20 question task cards that explore different aspects of Fractions.

★ Workbook– Easily make Fraction work booklets with 2 different answer page options. 2 to a page or full page..

★ Tracker sheet– Easily keep track of which task cards have been completed.



TOPICS COVERED:

USES:

- ✓ Identifying Fractions
- ✓ Describing Fractions
- ✓ Working with Fractions in everyday situations.
- ✓ Drawing representations of fractions

- ♥ Whole class activities
- ♥ Fast finisher
- ♥ Casual teaching resource
- ♥ Split book
- ♥ Math workbook
- ♥ Assessment
- ♥ Math centre/rotation activities

EASY TO USE!!

3

Half of Frankie's toys are blue. Draw of her toys

12

Draw 3 different shapes and show how you would cut them into $\frac{1}{4}$.

FRACTIONS

OPEN ENDED TASK ANSWER SHEET

Write the number of the task card in the circle and then write/draw your answer in the box

5


6

Name: _____

OPEN ENDED FRACTION TASK TRACKER SHEET






Tick off the number as you complete it to keep a track of the tasks you have done.

1	2	3	4	5
9	10			
14	15			
19	20			



Name: _____

OPEN ENDED FRACTION TASK BOOKLET



PRINT AND LAMINATE
FOR ENDLESS USE
OR DISPLAY ON
SCREEN

PRINT AND GO